


# Chromatic Intervals III

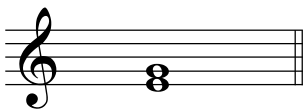
(Major, Minor, Perfect, Augmented and Diminished Intervals)

Name these intervals.


Use "M" for major intervals,  
 "m" for minor intervals,  
 "P" for perfect intervals,  
 "dim" for diminished intervals and  
 "Aug" for augmented intervals.

Example 


dim 7

1 

\_\_\_\_\_

2 


\_\_\_\_\_

3 


\_\_\_\_\_

4 


\_\_\_\_\_

5 


\_\_\_\_\_

6 


\_\_\_\_\_

7 


\_\_\_\_\_

8 


\_\_\_\_\_

9 


\_\_\_\_\_

10 


\_\_\_\_\_

11 

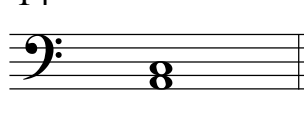
\_\_\_\_\_

12 


\_\_\_\_\_

13 


\_\_\_\_\_

14 


\_\_\_\_\_

15 


\_\_\_\_\_

16 


\_\_\_\_\_

17 


\_\_\_\_\_

18 


\_\_\_\_\_

19 


\_\_\_\_\_

20 


\_\_\_\_\_

21 


\_\_\_\_\_

22 

\_\_\_\_\_

23 

\_\_\_\_\_

24 

\_\_\_\_\_